

Olympiad Foundation

(CLASS - XIth to XIIth)



Time allowed : 1 Hour

Maximum Marks : 50

INSTRUCTIONS :

1. Use Blue/Black ballpoint pen only to darken the appropriate circle.
2. Mark should be dark and should completely fill the circle.
3. Dark only one circle for each entry.
4. Dark the circle in the space provided only.
5. Rough work must not be done on the answer sheet and do not use white-fluid or any other rubbing material on Answer sheet.
6. Each question carries one mark.
7. There is no negative marking.
8. Attempt all questions
9. Please check the question paper contains 50 questions

LEVEL-3
(CLASS -XITH XIITH)

Time : 1 Hour

ROAD SAFETY
Marks : 50

(1) On a Road that has been designated as one way

- (A) You should not drive in reverse gear
- (B) You should not drive overtake
- (C) You should not park
- (D) None of these

(2) Transport vehicles can be distinguished by

- (A) The colour of the vehicle
- (B) Number plate of the vehicle
- (C) Tyre size of the vehicle
- (D) None of these

(3) A learner's licence is valid for a period

- (A) 30 days
- (B) 6 months
- (C) 4 months
- (D) All of these

(4) Free passage should be provided to the following vehicles

- (A) Express buses
- (B) Police Vehicle
- (C) Fire Service vehicle and Ambulance
- (D) None of these

(5) Which type of vehicle are in the category of light motor vehicle ?

- (A) Jeep
- (B) Tractor
- (C) Tempo
- (D) All of these

(6) In case of a road does not have a footpath, pedestrians will have to

- (A) Walk on the right side of the road
- (B) Walk on the left side of the road
- (C) Walk on any side of the road
- (D) None of these

(7) Driver of a vehicle can overtake when

- (A) The driver of the vehicle ahead gives the signal to overtake.
- (B) Road is wide enough
- (C) Driving down a hill
- (D) None

(8) Driver of a vehicle shall drive through

- (A) Left side of the road
- (B) Right side of the road
- (C) Centre of the road
- (D) All of the above

(9) If a vehicle is parked on the side of a road at night

- (A) The Vehicle should be locked
- (B) Park light should remain on
- (C) Both
- (D) None

(10) Fog lamps should be used when

- (A) There is mist
- (B) At night
- (C) both
- (D) None

(11) Zebra lines are meant For

- (A) Stopping vehicle
- (B) Crossing of pedestrians
- (C) Overtaking
- (D) None

(12) Red traffic light is an sign to

- (A) Slow the vehicle
- (B) Proceed with caution
- (C) Stop the vehicle
- (D) All of these


(13) Parking fornt of a hospital is

- (A) Not correct
- (B) Correct
- (C) Depends on the situation
- (D) All of the above

(14) Mobile phone should not be used

- (A) At home
- (B) In office
- (C) While driving a vehicle
- (D) None of these

(15) Validity of pollution under control certificate is

- (A) 1 year
 - (B) 6 month
 - (C) 2 month
 - (D) All of these
- 

(16) Minimum age for availing a license to drive a motor vehicle without gear is

- (A) 16 years
- (B) 17 years
- (C) 18 years
- (D) None

(17) One time tax for a new car is

- (A) 5 year
- (B) 15 year
- (C) Until registration
- (D) None


(18) Hand brake should be used to

- (A) Park a vehicle
- (B) Apply brake suddenly
- (C) Reduce speed
- (D) All of the above

(19) What is the first phase of traffic regulations ?

- (A) Driver controls
- (B) Vehicle controls
- (C) Traffic flow regulations
- (D) None

(20) The motor vehicle act was revised in _____.

- (A) 1939
 - (B) 1988
 - (C) 1989
 - (D) 1987
- 

(21) Traffic symbols are classified into how many categories ?

- (A) One
- (B) Two
- (C) Three
- (D) None

(22) The total conflict points at a junction on both two way roads are ?

- (A) 1
- (B) 4
- (C) 5
- (D) 6

(23) The maximum number of conflict point is formed in _____.

- (A) Two way regulation on both side
- (B) One Way
- (C) Three way
- (D) None

(24) The specification for road signs are specified by _____.

- (A) 1 RC6
- (B) 1 RC 21
- (C) 1 RC 67
- (D) 1 RC 47

(25) Stop sign is having _____.

- (A) Octagonal shape
- (B) Circular shape
- (C) Triangle shape
- (D) Any shape

(26) The clearance time is indicated by _____.

- (A) Red
- (B) Amber
- (C) Green
- (D) White

(27) Where was the first control fission of an atom carrier out ?

- (A) India
- (B) Japan
- (C) Russia
- (D) Germany

(28) Who made the famous 'atoms for peace' speech ?

- (A) Abraham lincoln
- (B) Dwight d eisenhower
- (C) Parker chewier
- (D) Nehru

(29) How many % of assionable u -23 Occuring in uranium ?

- (A) 0.1%
- (B) 0.5%
- (C) 0.7%
- (D) 1.5%

(30) Nuclear energy is only harmful

- (A) Not harmful
- (B) Harmful
- (C) Both
- (D) None of these

(31) What did chernoby disaster occurred ?

- (A) 1976
- (B) 1986
- (C) 1996
- (D) 2000

(32) Which radioactive cause cancer in thyroid gland ?

- (A) U-235
- (B) U-238
- (C) L-132
- (D) C-12

(33) The following sign represents :

- (A) Keep left
- (B) No road
- (C) Compulsory turn left
- (D) None



(34) The following sign represents.

- (A) No Entry
- (B) One way
- (C) Speed limit ends
- (D) All of the above




(35) Validity of learner's licence

- (A) Till the driving Licence is obtained
- (B) 6 months
- (C) 30 days
- (D) None

(36) The following sign represents :

- (A) First aid post
- (B) One way
- (C) No entry
- (D) All of these



(37) Which of the following is major cause of road accidents

- (A) Lack of highway safety
- (B) Drunken driving
- (C) Use cell phone
- (D) All of above

(38) Communicate road safety message through

- (A) Print
- (B) Electronic media
- (C) None of these
- (D) Both A and B

(39) Which type of knowledge is required to be a safe driver

- (A) Attitude
- (B) Skill
- (C) Knowledge
- (D) All of these

(40) Turn on Your lights when fog on rain reduce your visibility to less than

- (A) 50 meter
- (B) 60 meter
- (C) 100 meter
- (D) None of these

(41) The following sign represents :

- (A) Narrow road
- (B) Cycle crossing
- (C) Road widens
- (D) None of these



(42) The following sign represents :

- (A) Main road Ahead
- (B) Slip Road Ahead
- (C) Compulsory ahead
- (D) None



(43) What is the fine amount violation of traffic signal .

- (A) 50 Rs
- (B) 100 Rs
- (C) 120 Rs
- (D) 150 Rs

(44) Validity of P.U.C.C. (Pollution Under Control Certificate)

- (A) 6 Months
- (B) One year
- (C) Two Year
- (D) None

(45) The signal while taking U-turn.

- (A) Left turn signal
- (B) Right turn signal
- (C) Slow down Signal
- (D) None of these

(46) The hand brake is to be used.

- (A) To reduce the speed
- (B) To apply sudden brake
- (C) To Park a vehicle
- (D) All

(47) Using unregistered Vehicle in public place is.

- (A) Illegal
- (B) Legal
- (C) Legal of Emergency
- (D) None

(48) Overtaking is Prohibited in the following Case.

- (A) State highway
- (B) Pachayath road
- (C) Narrow bridge
- (D) All

(49) The Following Sign is represents.

- (A) Loose gravel
- (B) Cattle
- (C) Pedestrians crossing
- (D) None



(50) Minimum distance to kept from the vehicle going in front.

- (A) 10 Meter
- (B) 5 Meter
- (C) Safe distance According to speed
- (D) All of these

ANSWER KEY

1	A	2	B	3	B	4	C	5	D	6	A	7	A	8	A	9	C	10	A	11	B	12	C	13	A
14	C	15	B	16	A	17	B	18	A	19	A	20	B	21	C	22	D	23	A	24	C	25	A	26	A
27	D	28	B	29	C	30	B	31	B	32	C	33	C	34	B	35	B	36	A	37	D	38	D	39	A
40	C	41	C	42	B	43	B	44	A	45	B	46	C	47	A	48	C	49	C	50	C				

